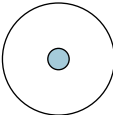
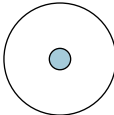
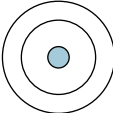
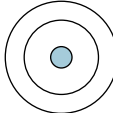
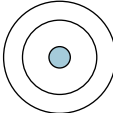
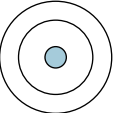
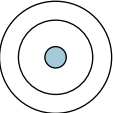
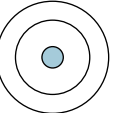
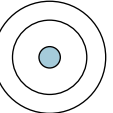
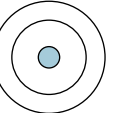
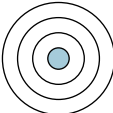
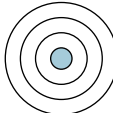
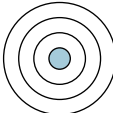
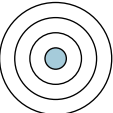
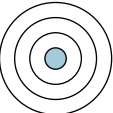
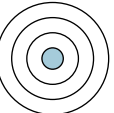
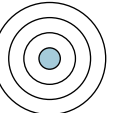
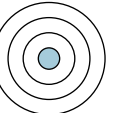
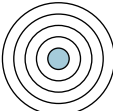
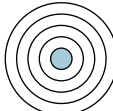


sivuryhmät

	1	2	3	4	5	6	7	8	9	10	11	12	13	14	15	16	17	18	
1																			
2																			
3																			
4																			
5																			
6																			
7																			

1. Täydennä elektronikuorimallit kuvaan.

2. Mitä yhteistä on samassa pystyrivissä eli ryhmässä olevilla aineilla? _____

3. Mitä yhteistä on samassa vaakarivissä eli jaksossa olevilla aineilla? _____