




UPPSNAPPARENS JULKALENDER SVARSKORT

1



2

S

$$\square + \square + \square = 18$$



3

<input type="text"/>	<input type="text"/>	<input type="text"/>	<input type="text"/>	<input type="text"/>	<input type="text"/>



4




Svar: _____

5



6





7

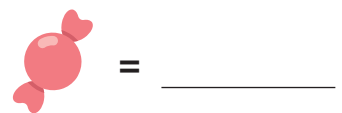
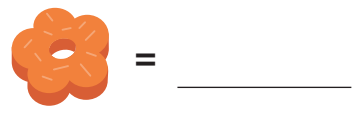
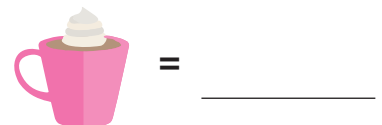








8



9



sammanlagt _____ €

10



Situation	Ja	Nej
1.		
2.		
3.		
4.		

11



12



Svar: _____





13

Four empty rectangular boxes for counting.



14





1. _____ 2. _____



3. _____ 4. _____

15



Empty square box for counting the cookies.

Empty square box for counting the cupcakes.

16



Svar: _____

17



Empty square box for counting the hoodies.





Empty square box for counting the scarves.



Empty square box for counting the beanies.



18

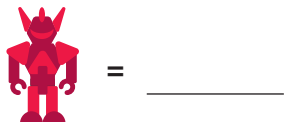
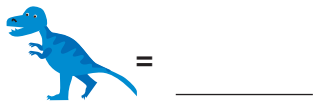


Svar: _____





19



20

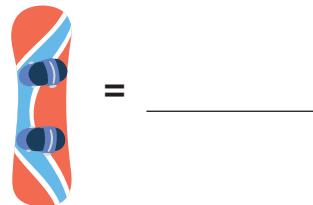
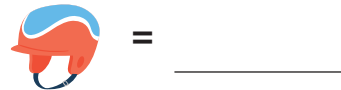


21

_____ + _____ = _____



22



23

_____ - _____ = _____



24

