




HOKSAAJAN JOULUKALENTERI VASTAUSKORTIT

1

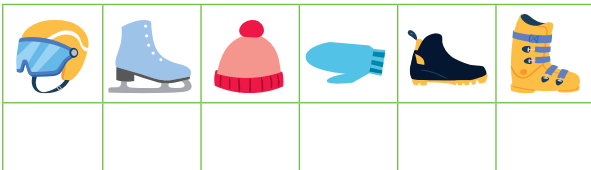


2

$$\square + \square + \square = 18$$



3



4





Vastaus: _____

5



6





7

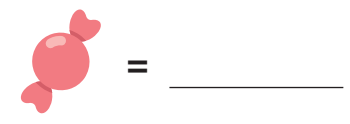
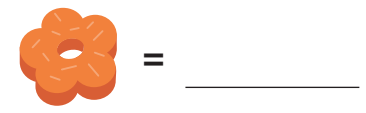








8



9



yhteensä _____ €

10



Tilanne	Kyllä	Ei
1.		
2.		
3.		
4.		

11



12



Vastaus: _____



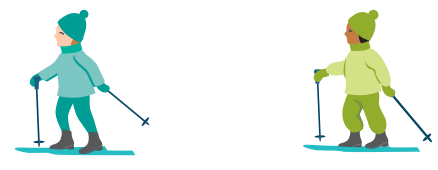


13

Four empty rectangular boxes for writing.



14




1. _____ 2. _____




3. _____ 4. _____

15



Empty rectangular box for counting.



Empty rectangular box for counting.

16



Vastaus: _____

17



Empty rectangular box for counting.



Empty rectangular box for counting.



Empty rectangular box for counting.



18

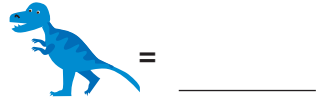


Vastaus: _____

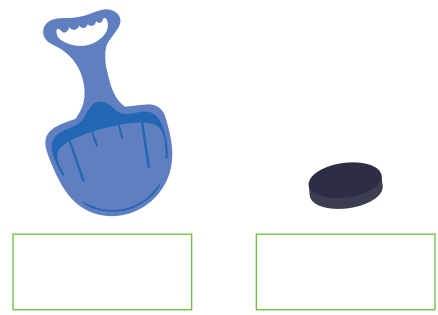




19



20

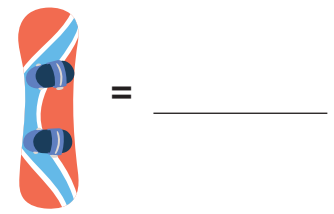
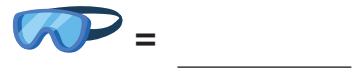
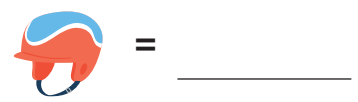


21

_____ + _____ = _____



22



23

_____ - _____ = _____



24

